



## TAREA DE MATEMÁTICAS 1ºBásico

Semana 22 del 24 al 28 de agosto

Nombre:

Curso:

Fecha:

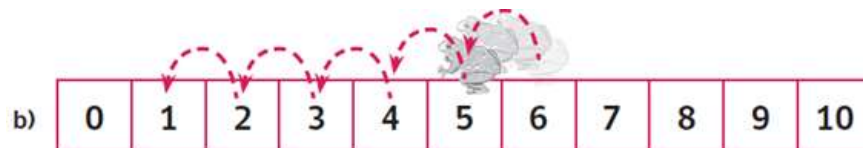
OA : Asociar la acción de retroceder con la sustracción de números del 0 al 10 con material concreto, pictórico y simbólico.

TICKET DE SALIDA:

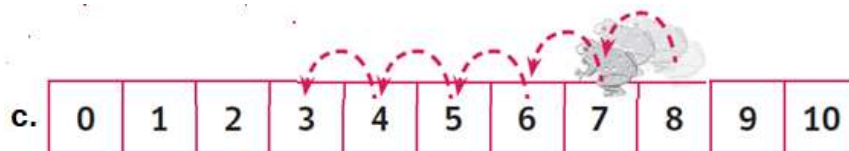
Observa y completa la frase numérica:




$$\square - \square = \square$$
$$\begin{array}{r} \square \\ - \square \\ \hline \square \end{array}$$



$$\square - \square = \square$$
$$\begin{array}{r} \square \\ - \square \\ \hline \square \end{array}$$



$$\square - \square = \square$$
$$\begin{array}{r} \square \\ - \square \\ \hline \square \end{array}$$











Recuerda enviar los resultados a los correos registrados en el  
archivo Guía.

### Solucionario guía

1.



$$\boxed{6} - \boxed{2} = \boxed{4} \quad - \begin{array}{r} \boxed{6} \\ \boxed{2} \\ \hline \boxed{4} \end{array}$$

2.-


 <u>1</u> <u>3</u>	 <u>8</u> <u>10</u>
 <u>5</u> <u>7</u>	 <u>7</u> <u>9</u>
 <u>2</u> <u>4</u>	 <u>1</u> <u>3</u>

3.-


a.  $8 - 2 = \boxed{6}$



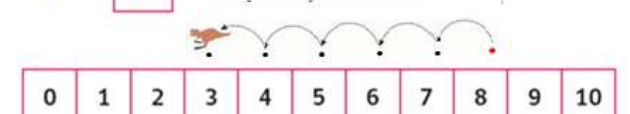
b.  $4 - 1 = \boxed{3}$



c.  $10 - 3 = \boxed{7}$



d.  $8 - 5 = \boxed{3}$






e.  $7 - 2 = 5$


f.  $9 - 1 = 8$

4.-



$$\boxed{9} - \boxed{2} = \boxed{7}$$
$$\begin{array}{r} \boxed{9} \\ - \boxed{2} \\ \hline \boxed{7} \end{array}$$

5.-



$$\boxed{8} - \boxed{2} = \boxed{6}$$
$$\begin{array}{r} \boxed{8} \\ - \boxed{2} \\ \hline \boxed{6} \end{array}$$