



TAREA DE TECNOLOGÍA

Semana 13 Y 14 del 22 de junio al 3 de julio

Nombre:

Curso:










Fecha:

O.A.: Crear un objeto tecnológico representando una máquina para sumar y solucionar un problema matemático.

Instrucciones:

Resuelve las siguientes sumas utilizando tu máquina para sumar .



1		2		3	
	$+ \quad =$		$+ \quad =$		$+ \quad =$
4		5		6	
	$+ \quad =$		$+ \quad =$		$+ \quad =$
7		8		9	
	$4 + 3 =$		$0 + 6 =$		$5 + 3 =$