



TAREA DE TECNOLOGÍA

Semana 18 Y 19 del 27 de Julio al 7 de Agosto

Nombre:

Curso:










Fecha:

O.A.: Crear un objeto tecnológico representando una máquina para sumar y solucionar un problema matemático.

Instrucciones:

Resuelve las siguientes sumas utilizando tu máquina para sumar .



| | | | | | |
|---|---|---|---|---|---|
| 1 |  | 2 |  | 3 |  |
| | $+ \quad =$ | | $+ \quad =$ | | $+ \quad =$ |
| 4 |  | 5 |  | 6 |  |
| | $+ \quad =$ | | $+ \quad =$ | | $+ \quad =$ |
| 7 |  | 8 |  | 9 |  |
| | $4 + 3 =$ | | $0 + 6 =$ | | $5 + 3 =$ |